

0 _____

1 _____

2 _____

3 _____

4 _____

5 _____

6 _____

7 _____

8 _____

9 _____

10 _____

11 _____

12 _____

13 _____

14 _____

15 _____

16 _____

17 _____

18 _____

19 _____

20 _____



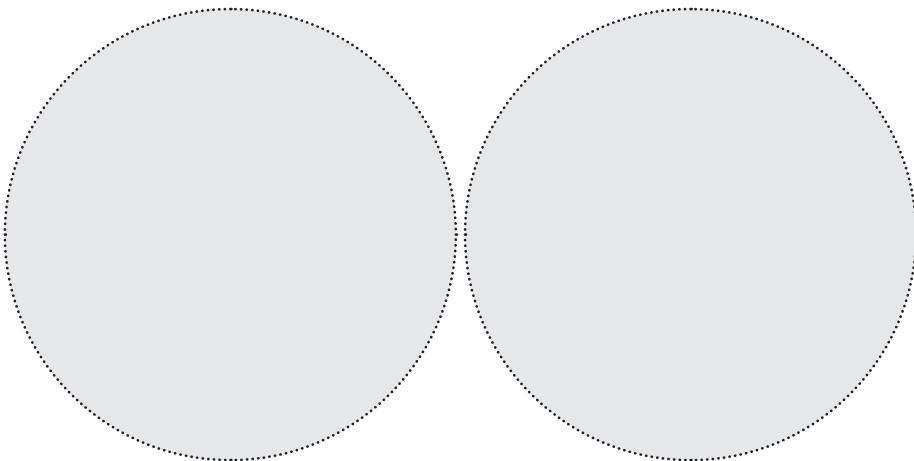

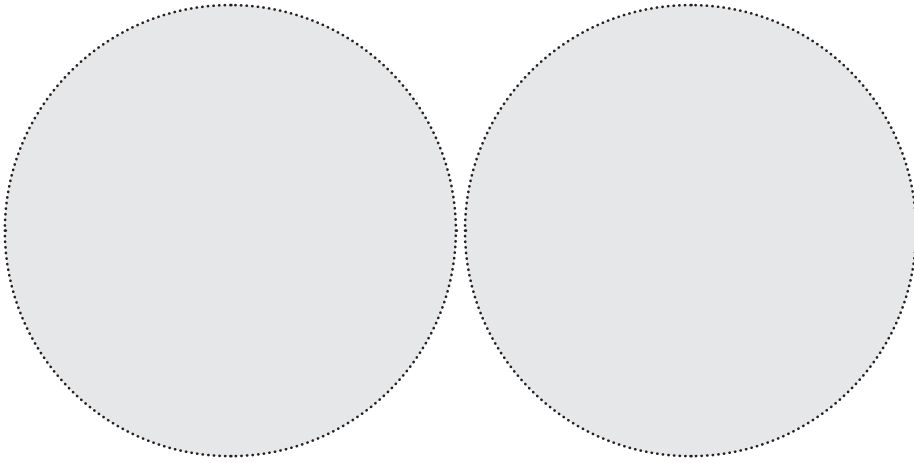
21 _____

22 _____

23 _____

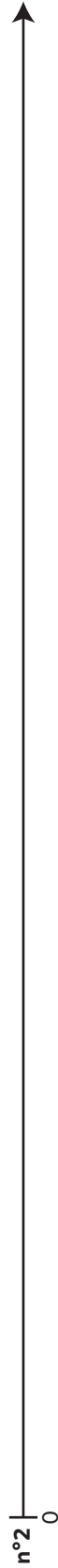
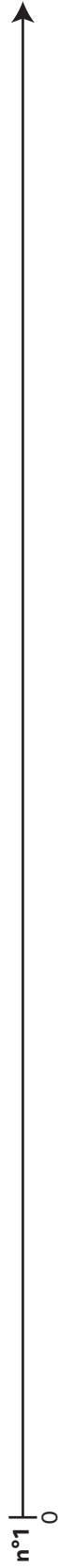
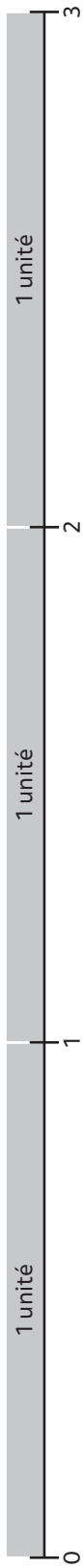
24 _____


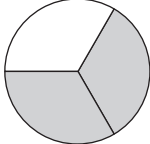

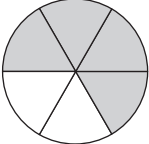
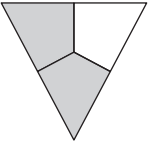
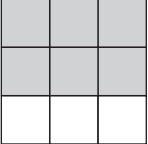
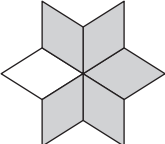
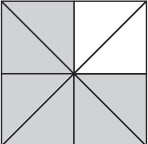
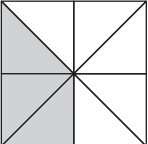
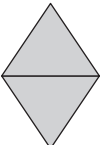
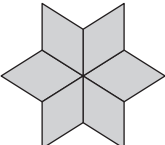
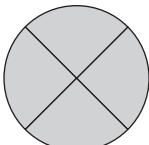

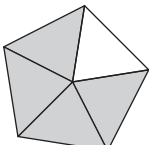
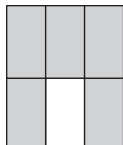

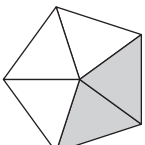
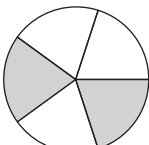

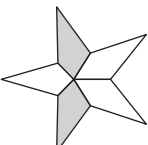
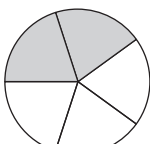

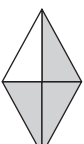
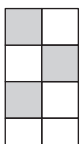
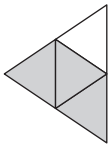
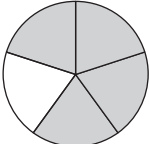

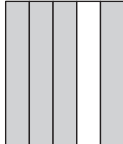

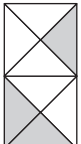
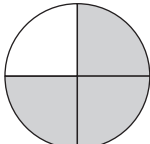

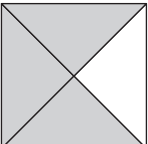
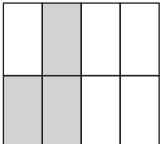
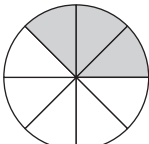
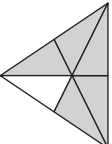
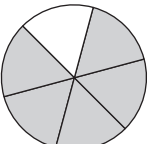
25 _____

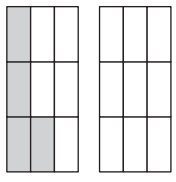
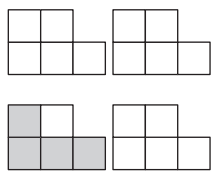
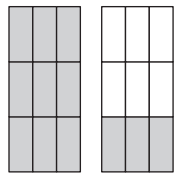
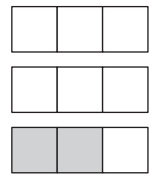
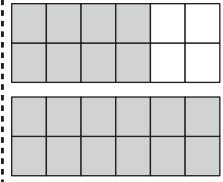
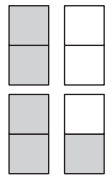
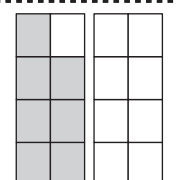
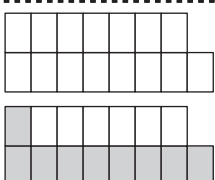

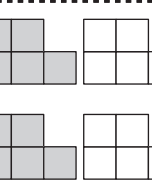
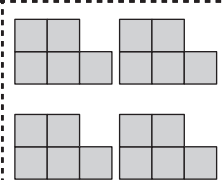
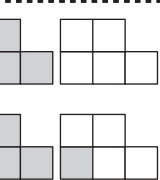
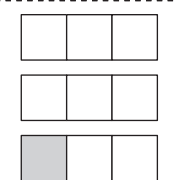
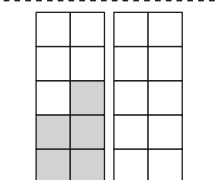
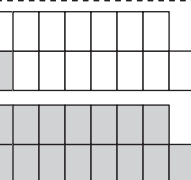

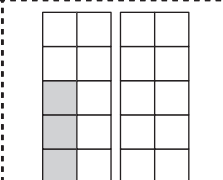
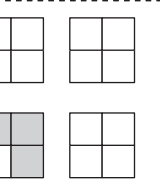
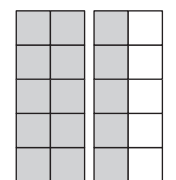
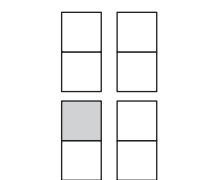


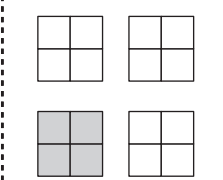
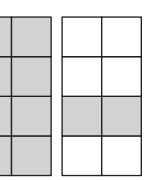
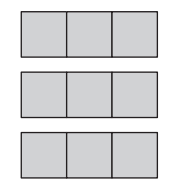

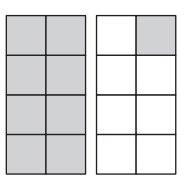
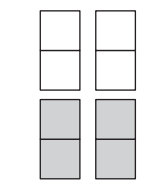
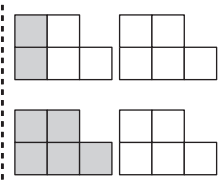
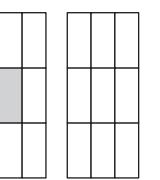




© Nathan, 2022. Reproduction autorisée pour une classe seulement.



| | | | | | |
|---|---|---|--|---|---|
|  |  |  |  |  |  |
| 1 | deux cinquièmes | $\frac{4}{5}$ |  |  |  |
|  | $\frac{2}{2}$ | $\frac{4}{4}$ |  | $\frac{6}{6}$ | Un |
|  |  |  |  | trois quarts |  |
| deux tiers |  |  |  | $\frac{2}{5}$ |  |
| $\frac{2}{3}$ |  | quatre cinquièmes |  |  |  |
|  | $\frac{3}{4}$ |  |  |  |  |
|  |  |  | cinq sixièmes |  | $\frac{3}{8}$ |
|  |  |  | $\frac{5}{6}$ |  | trois huitièmes |

| | | | | | |
|---|---|---|--|---|---|
|  |  |  |  |  |  |
| $7 \frac{7}{8}$ | $9 \frac{9}{15}$ | $9 \frac{9}{12}$ | $10 \frac{10}{15}$ | $20 \frac{20}{5}$ | $11 \frac{11}{5}$ |
|  |  |  |  |  |  |
| $1 \frac{1}{3}$ | $5 \frac{5}{10}$ | $16 \frac{16}{15}$ | $5 \frac{5}{3}$ | $3 \frac{3}{10}$ | $3 \frac{3}{4}$ |
|  |  |  |  |  |  |
| $15 \frac{15}{10}$ | $1 \frac{1}{2}$ | $6 \frac{6}{12}$ | $16 \frac{16}{8}$ | $4 \frac{4}{4}$ | $10 \frac{10}{8}$ |
|  |  |  |  |  |  |
| $9 \frac{9}{3}$ | $10 \frac{10}{4}$ | $9 \frac{9}{8}$ | $4 \frac{4}{2}$ | $7 \frac{7}{5}$ | $1 \frac{1}{9}$ |
|  |  |  |  |  |  |
| $5 \frac{5}{2}$ | $4 \frac{4}{9}$ | $4 \frac{4}{5}$ | $12 \frac{12}{9}$ | $2 \frac{2}{3}$ | $20 \frac{20}{12}$ |

Le JEU

du Dé-nominateur



★ ★

Fraction obtenue

.....

★ ★

1 Propose une représentation.

2 Écris la fraction en lettres.

.....

3 Compare-la à 1.

.....

4 Décompose-la sous la forme d'un entier et d'une fraction inférieure à 1.

.....

5 Indique entre quels nombres entiers elle se trouve.

..... < <

6 Trouve une autre fraction égale à la fraction obtenue.

.....

